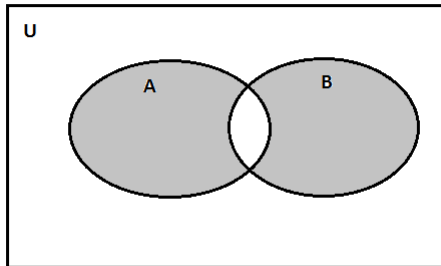


# Math 1303 - Math in the Liberal Arts

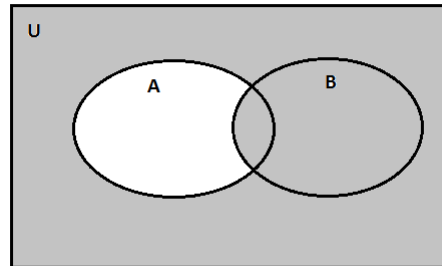
Quiz #8 - 2014.09.22

Name: \_\_\_\_\_

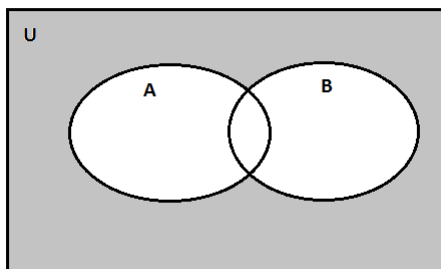
---



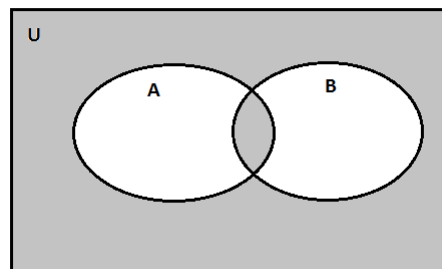
(a)



(b)



(c)



(d)

Use set statements to write a description of the shaded area. Use union, intersection, difference, and complement as necessary. More than one answer may be possible.